

2019-2020 Exam Solutions

SECTION A

1.

E. Mixed isotropic and kinematic hardening

[2 marks]

2.

C. Less conservative than the Goodman line

[2 marks]

3.

A.
$$u = \frac{3P^2}{EI} \left(\frac{L}{4} + \frac{3\pi L^3 R}{12} + \frac{\pi R^3}{3} + 2\pi R^2 \right)$$

[2 marks]

SOLUTION 3

Deflection, u , at the position of and in the direction of load, P , is:

$$\begin{aligned} u &= \frac{\partial U}{\partial P} \\ \therefore u &= \frac{\partial \left(\frac{P^3}{EI} \left(\frac{L}{4} + \frac{3\pi L^3 R}{12} + \frac{\pi R^3}{3} + 2\pi R^2 \right) \right)}{\partial P} \\ &= \frac{3P^2}{EI} \left(\frac{L}{4} + \frac{3\pi L^3 R}{12} + \frac{\pi R^3}{3} + 2\pi R^2 \right) \end{aligned}$$

4.

$$A. \quad \frac{dy}{dx} = \frac{1}{EI} \left(R_A \frac{x^2}{2} + M_O \langle x - 2 \rangle - P \frac{\langle x - 4 \rangle^2}{2} - q \frac{\langle x - 6 \rangle^3}{6} + A \right)$$

[2 marks]

SOLUTION 4

Integrating $EI \frac{d^2y}{dx^2} = R_A x + M_O \langle x - 2 \rangle^0 - P \langle x - 4 \rangle - q \frac{\langle x - 6 \rangle^2}{2}$ with respect to x gives:

$$EI \frac{dy}{dx} = R_A \frac{x^2}{2} + M_O \langle x - 2 \rangle - P \frac{\langle x - 4 \rangle^2}{2} - q \frac{\langle x - 6 \rangle^3}{6} + A$$

Rearranging this for $\frac{dy}{dx}$:

$$\frac{dy}{dx} = \frac{1}{EI} \left(R_A \frac{x^2}{2} + M_O \langle x - 2 \rangle - P \frac{\langle x - 4 \rangle^2}{2} - q \frac{\langle x - 6 \rangle^3}{6} + A \right)$$

5.

$$A. \quad \frac{dy}{dx} = \frac{1}{EI} \left(R_A \frac{x^3}{6} + \frac{M_O \langle x - 2 \rangle^2}{2} - P \frac{\langle x - 4 \rangle^3}{6} - q \frac{\langle x - 6 \rangle^4}{24} + Ax + B \right)$$

[2 marks]

SOLUTION 5

Integrating $\frac{dy}{dx} = \frac{1}{EI} \left(R_A \frac{x^2}{2} + M_O \langle x - 2 \rangle - P \frac{\langle x - 4 \rangle^2}{2} - q \frac{\langle x - 6 \rangle^3}{6} + A \right)$ with respect to x gives:

$$\frac{dy}{dx} = \frac{1}{EI} \left(R_A \frac{x^3}{6} + \frac{M_O \langle x - 2 \rangle^2}{2} - P \frac{\langle x - 4 \rangle^3}{6} - q \frac{\langle x - 6 \rangle^4}{24} + Ax + B \right)$$

6.

A. True

[2 marks]

7.

A. A

[2 marks]

SOLUTION 7

Point A is the **furthest point from the neutral axis and on the opposite side** to point E.

8.

B. $EI \frac{d^2y}{dx^2} = M$

[2 marks]

9.

D. The deflection in the perpendicular direction to the loading direction is always zero.

[2 marks]

10.

D. Reduces the load required to cause buckling

[2 marks]

SOLUTION 10

All buckling load equations have length, L , on the bottom of the equation. Therefore, increasing the length of the beam reduces the load required to cause buckling. An example, for a hinged-hinged beam, is shown below.

$$P_c = \frac{\pi^2 EI}{L^2}$$

11.

C. 48.0 MPa

[2 marks]

SOLUTION 11

Given $\sigma_x = 125$ MPa, $\sigma_y = 50$ MPa and $\tau_{zy} = 30$ MPa:

$$R = \sqrt{\left(\frac{\sigma_x - \sigma_y}{2}\right)^2 + \tau_{zy}^2} = \sqrt{\left(\frac{125 - 50}{2}\right)^2 + 30^2} = 48.0 \text{ MPa}$$

12. CJB Qu

B. 74 °C

[2 marks]

SOLUTION 12

$$\Delta T_{min} = \frac{\delta d}{d_0 \alpha} = \frac{0.03}{24 \times 17 \times 10^{-6}} = 73.5 \text{ °C}$$

13. CJB Qu

E. 312 MN/m

[2 marks]

SOLUTION 13

The axial stiffness for a 1D truss element is given by:

$$k = \frac{AE}{L} = \frac{0.015 \times 0.03 \times 208 \times 10^9}{0.3} = 312 \times 10^6 \text{ N/m}$$

14. CJB Qu

D. 60 MPa

[2 marks]

SOLUTION 14

The maximum shear stress at the N.A. given by:

$$\tau = \frac{SA\bar{y}}{I_z} = \frac{12 \times 40000 \times (25 \times 20) \times 10}{25 \times 40^3 \times 25} = 60 \text{ MPa}$$

15. CJB Qu

E. 26 MPa

[2 marks]

SOLUTION 15

$$\sigma_r = A - \frac{B}{r^2} - \frac{3 + \nu}{8} \rho \omega^2 r^2$$

$$\sigma_\theta = A + \frac{B}{r^2} - \frac{1 + 3\nu}{8} \rho \omega^2 r^2$$

at $r = 0.025$ (ID), $\sigma_r = 0$ therefore:

$$0 = A - \frac{B}{0.025^2} - \frac{3 + 0.3}{8} 8000 \times 314.15^2 \times 0.025^2$$

$$0 = A - 1600B - 2.04 \times 10^5$$

at $r = 0.2$ (OD), $\sigma_r = 0$ therefore:

$$0 = A - \frac{B}{0.2^2} - \frac{3 + 0.3}{8} 8000 \times 314.15^2 \times 0.2^2$$

$$0 = A - 25B - 13.0 \times 10^6$$

$$0 = -1575B + 12.8 \times 10^6$$

therefore:

$$B = 8142$$

$$A = 13.2 \times 10^6$$

Hoop stress at the bore is given by:

$$\sigma_{\theta} = 13.2 \times 10^6 + \frac{8142}{0.025^2} - \frac{1 + 3\nu}{8} 8000 \times 315.14^2 \times 0.025^2 = \mathbf{26.3 \text{ MPa}} \approx \mathbf{26 \text{ MPa}}$$

16. CJB Qu

D. 209 MPa

[2 marks]

SOLUTION 16

Torsional shear stress:

$$\tau = \frac{Tr}{J} = \frac{32 \times 500 \times 12.5 \times 10^{-3}}{\pi \times (25 \times 10^{-3})^4} = 163 \text{ MPa}$$

Axial stress:

$$\sigma_a = \frac{F}{A} = \frac{40000}{\pi \times (12.5 \times 10^{-3})^2} = 81.5 \text{ MPa}$$

Centre given by:

$$C = \frac{\sigma_a}{2} = \frac{81.5}{2} = 40.75 \text{ MPa}$$

Radius is given by:

$$R = \sqrt{\left(\frac{\sigma_a}{2}\right)^2 + \tau^2} = \sqrt{40.75^2 + 163^2} = 168 \text{ MPa}$$

Max principal stress given by:

$$\sigma_1 = C + R = 40.75 + 168 = \mathbf{208.75} \approx \mathbf{209 \text{ MPa}}$$

17. CJB Qu

A. More conservative

[2 marks]

18. CJB Qu

D. Deviatoric Plane

[2 marks]

19. CJB Qu

A.
$$[k_{AB}] = \left(\frac{AE}{L}\right) \begin{bmatrix} 0.75 & -\sqrt{3}/4 & -0.75 & \sqrt{3}/4 \\ -\sqrt{3}/4 & 0.25 & \sqrt{3}/4 & -0.25 \\ -0.75 & \sqrt{3}/4 & 0.75 & -\sqrt{3}/4 \\ \sqrt{3}/4 & -0.25 & -\sqrt{3}/4 & 0.25 \end{bmatrix}$$

[2 marks]

20. CJB Qu

C. 43 mm

[2 marks]

SOLUTION 20

According to the von Mises yield criterion:

$$\sigma_y^2 = \sigma_1^2 - \sigma_1\sigma_2 + \sigma_2^2$$

For a shaft under pure torque, the Mohr's circle is centred on the origin and σ_1 and σ_2 will be the same magnitude and will also be the maximum allowable shear stress, therefore:

$$\sigma_y^2 = 3R^2$$

or

$$250^2 = 3R^2$$

giving:

$$R = \sqrt{\frac{250^2}{3}} = 144.34 \text{ MPa}$$

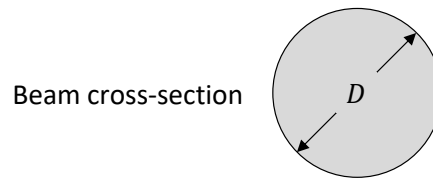
$$144.34 \times 10^6 = \frac{Tr}{J} = \frac{2T}{\pi r^3}$$

$$r = \sqrt[3]{\frac{2 \times 18000}{144 \times 10^6 \pi}} = \mathbf{0.043} = \mathbf{43 \text{ mm}}$$

SECTION B

21.

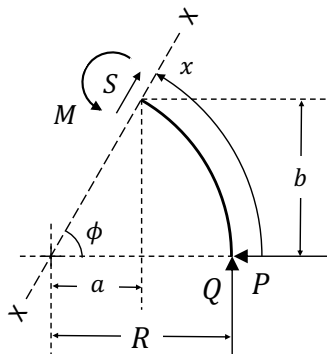
Second Moment of Area, I , calculation:



$$\therefore I = \frac{\pi D^4}{64}$$

[2 marks]

Free Body Diagram:



[3 marks]

Taking moments about X-X:

$$M + Q(R - a) = Pb$$

$$\therefore M = PR\sin\phi - Q(R - R\cos\phi) = PR\sin\phi - QR(1 - \cos\phi)$$

[3 marks]

Substituting this into the equation for Strain Energy in a beam under bending gives,

$$U = \int \frac{M^2}{2EI} dx = \frac{R}{2EI} \int_0^\pi (PR\sin\phi - QR(1 - \cos\phi))^2 d\phi$$

where,

$$ds = R d\phi$$

[3 marks]

Vertical displacement:

$$u_v = \frac{\partial U}{\partial Q} = \frac{R}{EI} \int_0^{\pi} (PR \sin \phi - QR(1 - \cos \phi))(-R(1 - \cos \phi)) d\phi$$

[3 marks]

Setting dummy load, $Q = 0$,

$$\begin{aligned} u_v &= \frac{PR^3}{EI} \int_0^{\pi} \sin \phi (\cos \phi - 1) d\phi \\ &= \frac{PR^3}{EI} \int_0^{\pi} (\sin \phi \cos \phi - \sin \phi) d\phi \end{aligned}$$

[1 mark]

Trig identity,

$$\begin{aligned} \sin 2\phi &= 2 \sin \phi \cos \phi \\ \therefore \sin \phi \cos \phi &= \frac{1}{2} \sin 2\phi \end{aligned}$$

Substituting this into (i),

$$\begin{aligned} u_v &= \frac{PR^3}{EI} \int_0^{\pi} \left(\frac{1}{2} \sin 2\phi - \sin \phi \right) d\phi = \frac{PR^3}{EI} \left[-\frac{1}{4} \cos 2\phi + \cos \phi \right]_0^{\pi} \\ \therefore u_v &= -\frac{2PR^3}{EI} \end{aligned}$$

[2 marks]

Substituting in the expression for second moment of area, I ,

$$\therefore u_v = -\frac{128PR^3}{E\pi D^4}$$

[1 mark]

i.e. downwards deflection of $\frac{128PR^3}{E\pi D^4}$. This is therefore the required expression for the minimum step height, h .

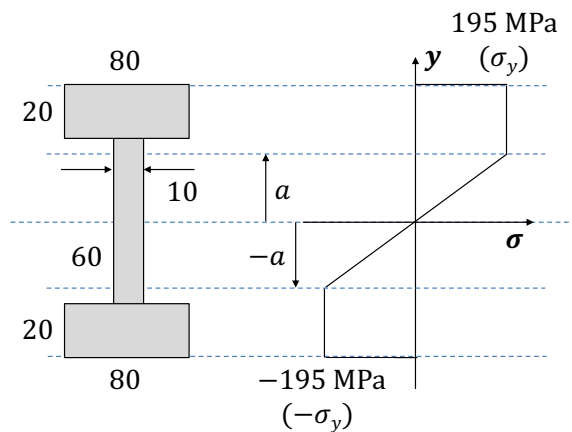
[2 marks]

22.

(a)



Assuming yielding occurs at $y \geq a$ and $y \leq -a$, the stress distribution in the beam cross-section is as follows:



Cross section of the beam

Stress distribution through the beam cross section

Variation of stress with y :

- For $a < y < 50$, $\sigma = 195$ MPa
- For $-a < y < a$, $\sigma = \frac{195}{a}y$ MPa
- For $-50 < y < -a$, $\sigma = -195$ MPa

[3 marks]

Moment equilibrium

(Balance the moments due to stresses in the elastic and plastic regions with the applied moment)

$$M = \int_A y\sigma dA = \int y\sigma bdy$$

[1 mark]

Due to the symmetry of the stress distribution above and below the Y-Y axis, and substituting in the elastic and plastic terms for σ , this can be rewritten as:

$$M = 2 \left\{ \int_0^a y \frac{\sigma_y}{a} y b_w dy + \int_a^{30} y \sigma_y b_w dy + \int_{30}^{50} y \sigma_y b_f dy \right\}$$

[2 marks]

$$\begin{aligned} \therefore \frac{M}{2\sigma_y} &= \frac{b_w}{a} \int_0^a y^2 dy + b_w \int_a^{30} y dy + b_f \int_{30}^{50} y dy \\ &= \frac{b_w}{a} \left[\frac{y^3}{3} \right]_0^a + b_w \left[\frac{y^2}{2} \right]_a^{30} + b_f \left[\frac{y^2}{2} \right]_{30}^{50} \\ &= \frac{b_w}{3a} (a^3) + \frac{b_w}{2} (30^2 - a^2) + \frac{b_f}{2} (50^2 - 30^2) \\ &= -\frac{b_w}{6} a^2 + 450b_w + 800b_f \\ \therefore \frac{b_w}{6} a^2 &= 450b_w + 800b_f - \frac{M}{2\sigma_y} \end{aligned}$$

[2 marks]

$$\therefore a = \sqrt{2700 + 4800 \frac{b_f}{b_w} - \frac{3M}{\sigma_y b_w}}$$

[2 marks]

$$= \mathbf{19.8 \text{ mm}}$$

[2 marks]

(b)

Assuming unloading to be entirely elastic. Beam bending equation:

$$\begin{aligned} \frac{M}{I} &= \frac{\sigma}{y} \left(= \frac{E}{R} \right) \\ \therefore \frac{\Delta M}{I} &= \frac{\Delta \sigma}{y} \end{aligned}$$

[1 mark]

Where,

$$I = \frac{bd^3}{12} - 2 \left(\frac{b_i d_i^3}{12} \right) = \frac{80 \times 100^3}{12} - 2 \left(\frac{35 \times 60^3}{12} \right) = 5,406,666.67 \text{ mm}^2$$

[1 mark]

Max change in stress ($\Delta\sigma$) will occur at $y = \pm 50$ mm (furthest perpendicular distance from the Y-Y axis):

$$\begin{aligned} \therefore \Delta\sigma_{max}^{el} &= \frac{\Delta M \times y_{max}}{I} = \frac{-M \times y_{max}}{I} = \frac{-26,460,000 \times \pm 50}{5,406,666.67} \\ &= \mp 244.7 \text{ MPa} \end{aligned}$$

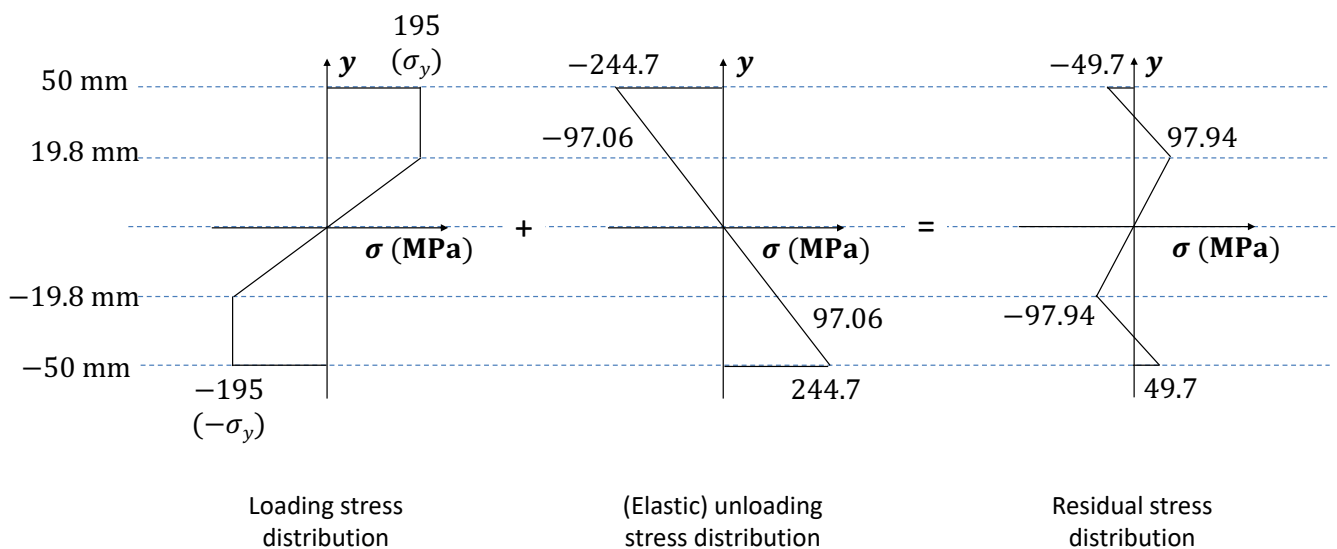
i.e.:

$$\text{at } y = 50 \text{ mm, } \therefore \Delta\sigma_{max}^{el} = -244.7 \text{ MPa}$$

$$\text{and at } y = -50 \text{ mm, } \therefore \Delta\sigma_{max}^{el} = 244.7 \text{ MPa}$$

[2 marks]

Therefore, the stress distribution after unloading can be calculated as:



Interpolation of (elastic) unloading line:

$$\text{At } y = 50 \text{ mm, } \sigma = -244.7 \text{ MPa}$$

$$y = m\sigma + c$$

$$\therefore 50 = m \times -244.7 + 0$$

$$\therefore m = -0.204$$

$$\text{At } y = 19.8 \text{ mm, } 19.8 = -0.204 \times \sigma$$

$$\therefore \sigma = -97.06 \text{ MPa}$$

[3 marks]

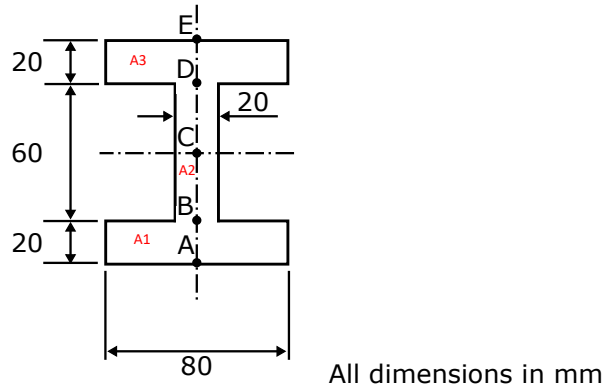
The largest residual stress magnitude is ± 97.94 MPa, so reverse yielding does not occur, as this is below yield of the materials, and so the assumption of purely elastic unloading is reasonable.

[1 mark]

23.

(a)

Calculate the second moment of area of the section about the neutral axis (N.A.)



$$I = \sum \left(\frac{BD^3}{12} + A(\bar{y}_n - \bar{y})^2 \right)$$

[1 mark]

	W	B	\bar{y}_n	A	$\bar{A}y_n$	$\frac{BD^3}{12}$	
A1	80	20	-40	1600	2560000	53333	2.61E+06
A2	20	60	0	1200	0	360000	3.60E+05
A3	80	20	40	1600	2560000	53333	2.61E+06
						I_tot	5.59E+06

[4 marks]

$$\tau = \frac{SQ}{Iz}$$

[1 mark]

A & E are free surfaces, so:

$$\tau_A = \tau_E = 0$$

[1 mark]

Can use area below at B, 2 values due to section change:

$$\tau_{B1} = \frac{32000 \times (20 \times 80) \times (40)}{5.59 \times 10^6 \times 80} = 4.6 \text{ MPa}$$

[2 marks]

$$\tau_{B2} = \frac{32000 \times (20 \times 80) \times (40)}{5.59 \times 10^6 \times 20} = 18.3 \text{ MPa}$$

[2 marks]

At C (centroid), need to consider the effect of two areas:

In this case $Q = \sum A(y_n - y)$

$$Q = ((20 \times 80) \times (40)) + (20 \times 30 \times (15))$$

$$Q = 64000 + 9000 = 73000$$

and therefore:

$$\tau_G = \frac{32000 \times 73000}{5.59 \times 10^6 \times 20} = 20.9 \text{ MPa}$$

[3 marks]

At D, 2 values, which are the same as B (symmetry)

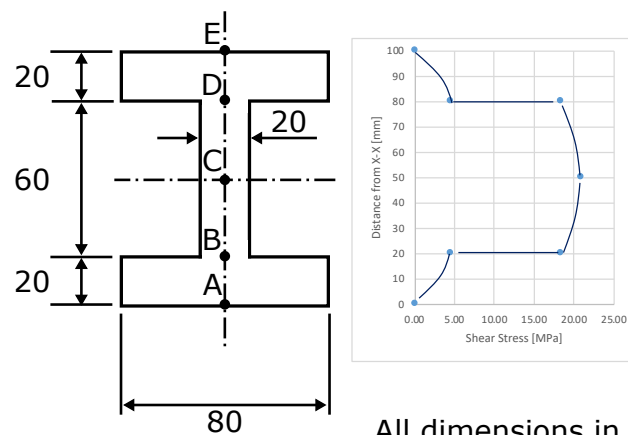
$$\tau_{D1} = \frac{32000 \times (20 \times 80) \times (40)}{5.59 \times 10^6 \times 20} = 18.3 \text{ MPa}$$

[1 mark]

$$\tau_{D2} = \frac{32000 \times (20 \times 80) \times (40)}{5.59 \times 10^6 \times 80} = 4.6 \text{ MPa}$$

[1 mark]

(b)



[4 marks]